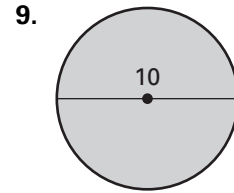
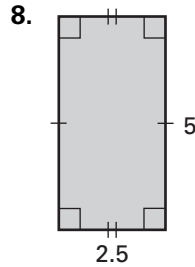
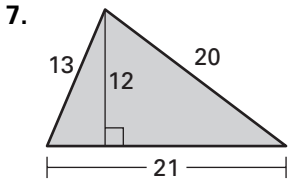
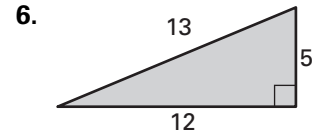
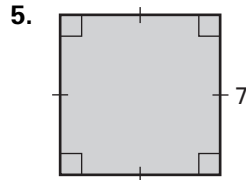
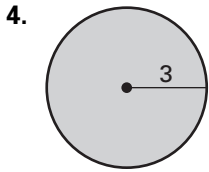
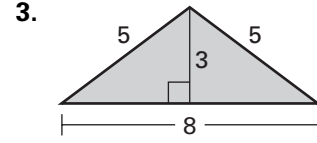
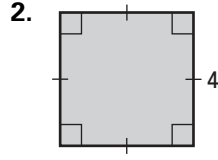
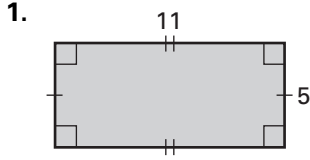


Practice A

For use with pages 51–58

Find the perimeter (or circumference) and area of the figure.
(Where necessary, use $\pi \approx 3.14$.)



Find the area of the figure described.

- 10. Rectangle with length 8 centimeters and width 4.5 centimeters
- 11. Triangle with height 5 inches and base 12 inches
- 12. Circle with diameter 10 feet (use $\pi \approx 3.14$)

Find the area of the figure. (Where necessary, use $\pi \approx 3.14$.)

